


Learning with Landy

Maths

Array for Landy!

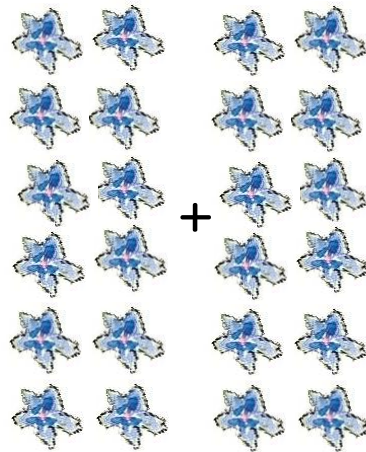


$$2 + 2 + 2 + 2 =$$


$$4 + 4 =$$

$$2 \times 4 =$$

$$4 \times 2 =$$



$$+ = \square$$

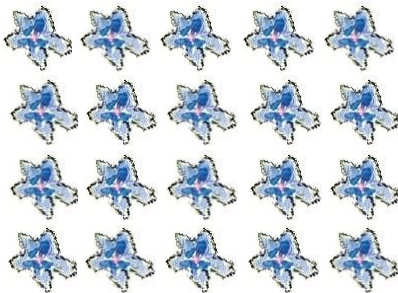


$$5 + 5 + 5 =$$

$$3 + 3 + 3 + 3 + 3 =$$

$$3 \times 5 =$$

$$5 \times 3 =$$




$$4 + 4 + 4 + 4 + 4 =$$

$$5 + 5 + 5 + 5 =$$

$$4 \times 5 =$$

$$5 \times 4 =$$




$$2 + 2 + 2 =$$

$$3 + 3 =$$

$$3 \times 2 =$$

$$2 \times 3 =$$




$$2 + 2 + 2 + 2 + 2 =$$

$$5 + 5 =$$

$$2 \times 5 =$$

$$5 \times 2 =$$



$$2 + 2 =$$

$$2 \times \square = 4$$



$$2 + 2 + 2 + 2 + 2 + 2 + 2 + 2 + 2 =$$


$$9 + 9 =$$

$$2 \times 9 =$$


$$9 \times 2 =$$

Learning with Landy

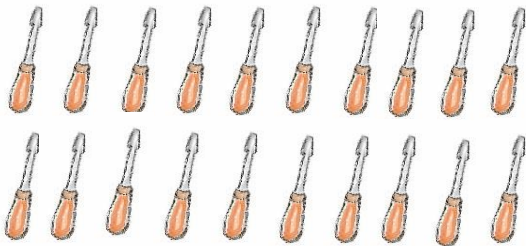
Maths




Working with Arrays



Write two number sentences for this array:



Write all the number sentences for this array:



Write three number sentences for this array:

